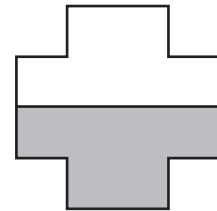




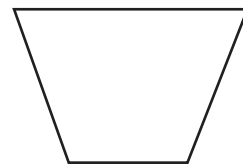



# APPROCHE DES FRACTIONS

- 1 Marque d'un point rouge les figures qui ont été à moitié coloriées en rouge, en gris


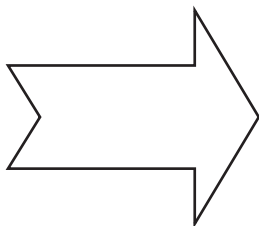


- 2 Colorie en rouge la moitié de chaque forme



Question : Chaque forme a-t-elle 2 parties égales : oui ou non ?

- 3 Colorie en bleu la moitié de chacune de ces figures



Question : Chaque forme a-t-elle 2 parties égales : oui ou non ?